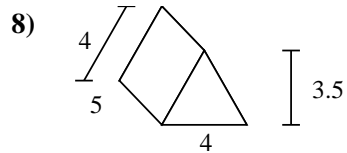
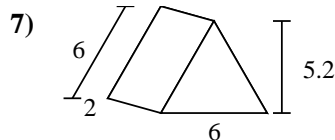
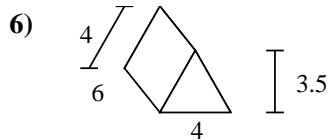
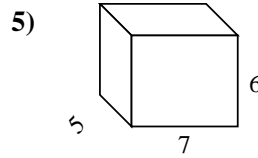
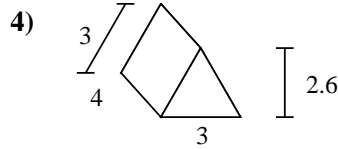
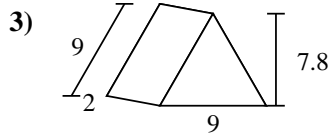
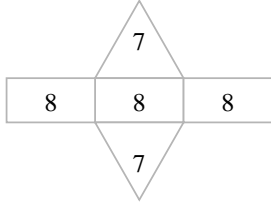
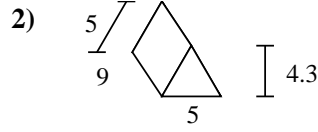
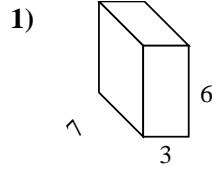
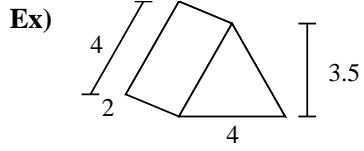




Find the surface area of each figure. Units are in cm (not to scale).



**Answers**

Ex. 38 cm<sup>2</sup>

1. \_\_\_\_\_

2. \_\_\_\_\_

3. \_\_\_\_\_

4. \_\_\_\_\_

5. \_\_\_\_\_

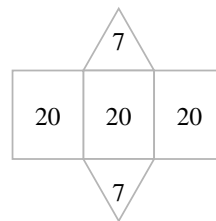
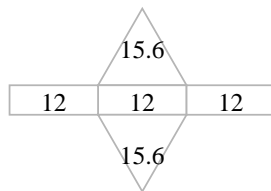
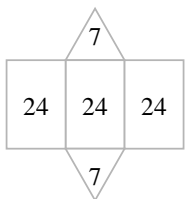
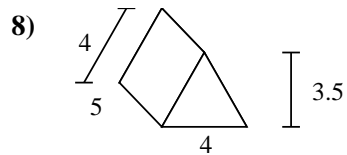
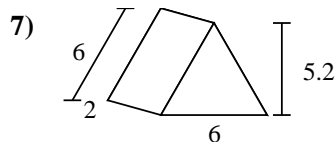
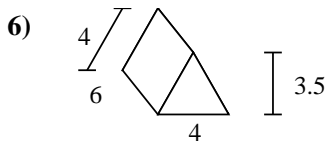
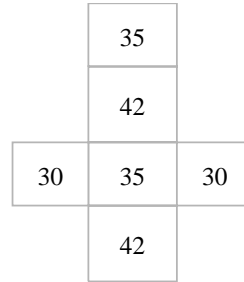
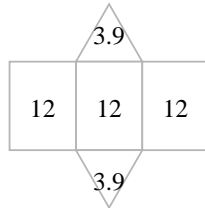
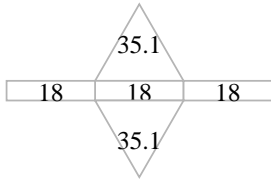
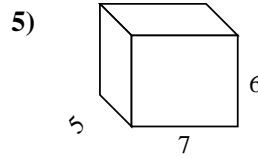
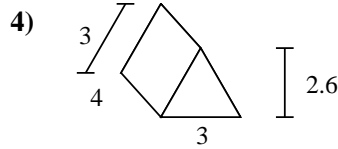
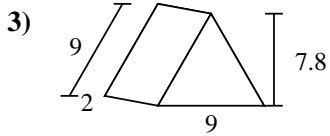
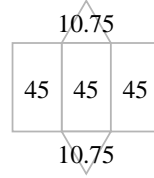
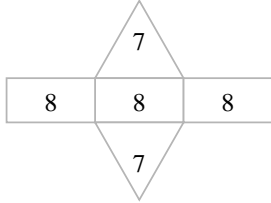
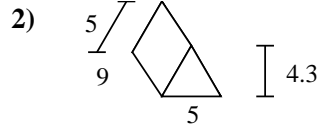
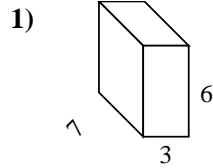
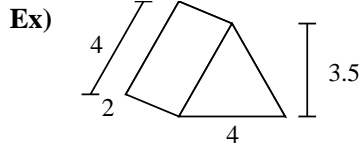
6. \_\_\_\_\_

7. \_\_\_\_\_

8. \_\_\_\_\_



Find the surface area of each figure. Units are in cm (not to scale).



Answers

Ex. 38 cm<sup>2</sup>

1. 162 cm<sup>2</sup>

2. 156.5 cm<sup>2</sup>

3. 124.2 cm<sup>2</sup>

4. 43.8 cm<sup>2</sup>

5. 214 cm<sup>2</sup>

6. 86 cm<sup>2</sup>

7. 67.2 cm<sup>2</sup>

8. 74 cm<sup>2</sup>